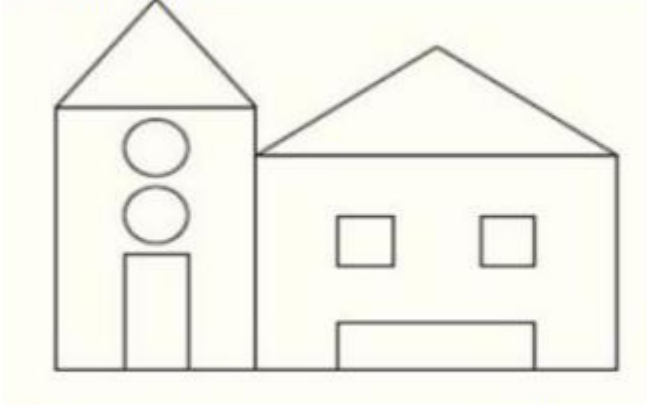





QUESTION BANK

Grade 2- MATHEMATICS

Chapter 1- Shapes and Lines

Q.No.	Questions and Answers
1	<p>1) Count the number of each shape in this picture and fill in the blanks.</p>  <p>Squares _____ Triangles _____ Rectangles _____ Circles _____</p> <p>Answer: Squares 2 Triangles 2 Rectangles 4 Circles 2</p>
2	<p>Identify the shape.</p>  <p>a) Cone b) Cuboid c) Sphere</p> <p>Answer : Cone</p>
3	<p>The number of faces of a cuboid is _____.</p>

a) 4 b) 0 c) 6


Answer : 6

4 The object which can roll is _____.



Answer : a

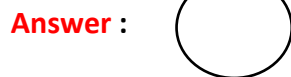
5 Name the shape.



Answer : Cube

6 Draw the plane shape for the given solid shape.





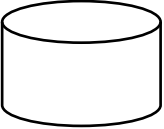












7 Name the shape.






Answer : Cuboid

8 Draw horizontal, vertical and slanted lines



9	<p>Draw different objects using lines.</p> <p>Answer : </p>								
10	<p>1) Which of the following shapes does not have straight lines?</p> <p>a)  b)  c) </p> <p>Answer : a</p>								
11	<p>1) Choose the letter which is made up of only straight lines.</p> <p>a) S b) C c) F</p> <p>Answer : C</p>								
12	<p>1. Fill in the blanks.</p> <table border="1" data-bbox="405 1301 1046 1839"> <thead> <tr> <th data-bbox="410 1308 692 1384">Plane shape</th> <th data-bbox="692 1308 1042 1384">Number of straight line</th> </tr> </thead> <tbody> <tr> <td data-bbox="410 1384 692 1532"></td> <td data-bbox="692 1384 1042 1532"></td> </tr> <tr> <td data-bbox="410 1532 692 1682"></td> <td data-bbox="692 1532 1042 1682"></td> </tr> <tr> <td data-bbox="410 1682 692 1839"></td> <td data-bbox="692 1682 1042 1839"></td> </tr> </tbody> </table>	Plane shape	Number of straight line						
Plane shape	Number of straight line								
									
									
									

Answer

Plane shape	Number of straight line
	4
	4
	1

:

13

1. Answer the following questions.



a) Which shape have only curved lines?

.....

b) Which shape have only straight lines?

.....

Answer : a) Circle
b) Square